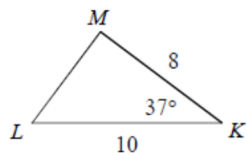
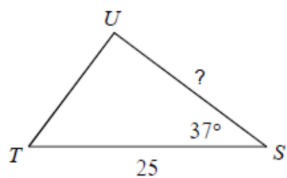


TARGET 6D

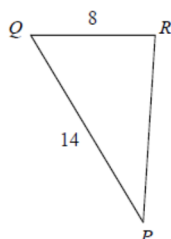
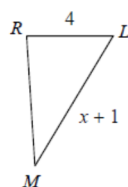
Name _____ Date _____

Solve for the missing variable. The triangles in each pair are similar.

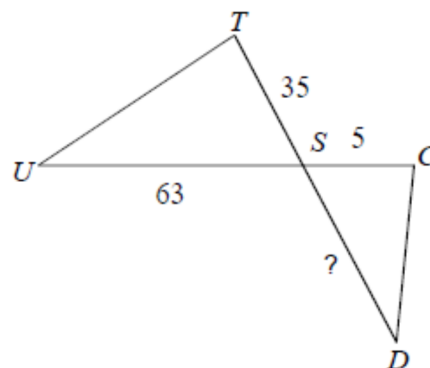
1.



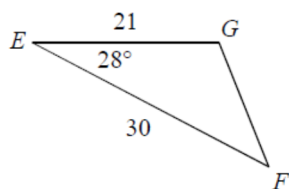
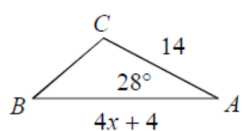
2.



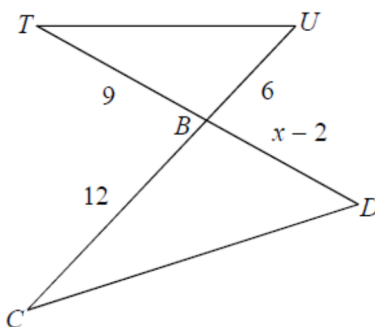
3.



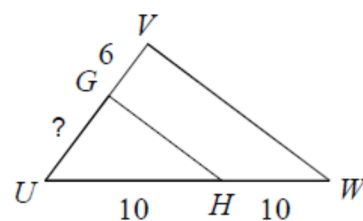
4.



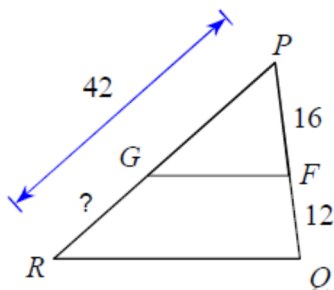
5.



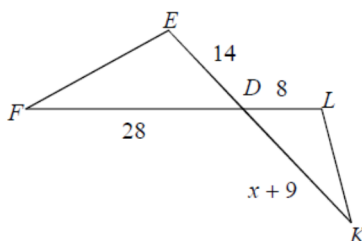
6.



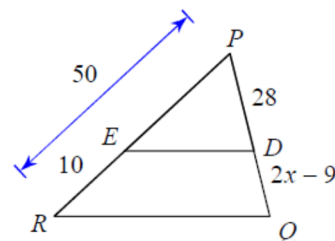
7.



8.



9.



TARGET 6D ANSWERS

1. $? = 20$

2. $x = 6$

3. $? = 9$

4. $x = 4$

5. $x = 10$

6. $? = 6$

7. $? = 18$

8. $x = 7$

9. $x = 8$